

# Worksheet 6 – How to judge a debate

d / p

## Proposition 1

┌ \_\_\_\_\_ ┐ Definition  
= \_\_\_\_\_  
└ \_\_\_\_\_ ┘

┌ \_\_\_\_\_ ┐ Model  
└ F ┘

┌ \_\_\_\_\_ ┐ Argument 1  
└ \_\_\_\_\_ ┘

┌ \_\_\_\_\_ ┐ Argument 2  
└ \_\_\_\_\_ ┘

## Opposition 1

┌ \_\_\_\_\_ ┐ Stance  
= \_\_\_\_\_  
└ \_\_\_\_\_ ┘

┌ \_\_\_\_\_ ┐ Refutation argument 1  
└ \_\_\_\_\_ ┘

┌ \_\_\_\_\_ ┐ Refutation argument 2  
└ \_\_\_\_\_ ┘

┌ \_\_\_\_\_ ┐ Argument 1  
└ \_\_\_\_\_ ┘

┌ \_\_\_\_\_ ┐ Argument 2  
└ \_\_\_\_\_ ┘

# Worksheet 6 – How to judge a debate

d / p

## Proposition 2

┌     ┐ Refutation argument 1  
└     ┘

┌     ┐ Refutation argument 2  
└     ┘

┌     ┐ Rebuilding argument 1  
└     ┘

┌     ┐ Rebuilding argument 2  
└     ┘

┌     ┐ Argument 3  
└     ┘

## Opposition 2

┌     ┐ Refutation argument 1  
└     ┘

┌     ┐ Refutation argument 2  
└     ┘

┌     ┐ Refutation argument 3  
└     ┘

┌     ┐ Rebuilding argument 1  
└     ┘

┌     ┐ Rebuilding argument 2  
└     ┘

┌     ┐ Argument 3  
└     ┘

# Worksheet 6 – How to judge a debate

d  
/ p

## Proposition 3

┌ Refutation argument 1  
└┘

┌ Refutation argument 2  
└┘

┌ Refutation argument 3  
└┘

┌ Rebuilding argument 1  
└┘

┌ Rebuilding argument 2  
└┘

┌ Rebuilding argument 3  
└┘

## Opposition 3

┌ Refutation argument 1  
└┘

┌ Refutation argument 2  
└┘

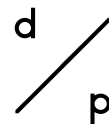
┌ Refutation argument 3  
└┘

┌ Rebuilding argument 1  
└┘


┌ Rebuilding argument 2  
└┘


┌ Rebuilding argument 3  
└┘

# Worksheet 6 – How to judge a debate





## Opposition 4

 Clash 1

 Clash 2

## Opposition 4

 Clash 1

 Clash 2

## Questions

How likely are the arguments to be true?	
Proposition	Opposition
Argument 1 1 2 3 4 5	Argument 1 1 2 3 4 5
Argument 2 1 2 3 4 5	Argument 2 1 2 3 4 5
Argument 3 1 2 3 4 5	Argument 3 1 2 3 4 5

How relevant are the arguments?	
Proposition	Opposition
Argument 1 1 2 3 4 5	Argument 1 1 2 3 4 5
Argument 2 1 2 3 4 5	Argument 2 1 2 3 4 5
Argument 3 1 2 3 4 5	Argument 3 1 2 3 4 5

Which team wins and why?
--------------------------